



Cambridge International AS & A Level

CANDIDATE
NAME

--


CENTRE
NUMBER

--	--	--	--	--

CANDIDATE
NUMBER

--	--	--	--

* 7 0 3 6 0 1 3 7 2 2 *



MATHEMATICS

9709/13

Paper 1 Pure Mathematics 1

May/June 2022

1 hour 50 minutes

You must answer on the question paper.

You will need: List of formulae (MF19)

INSTRUCTIONS

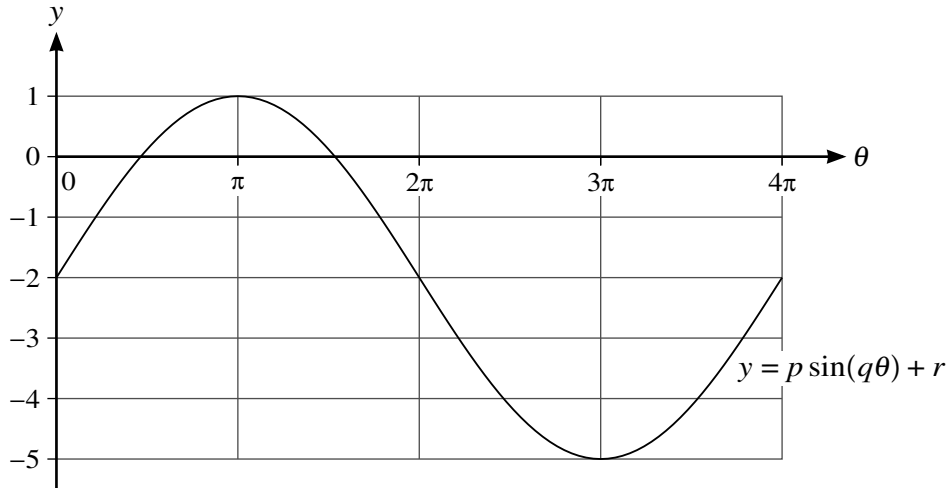
- Answer **all** questions.
- Use a black or dark blue pen. You may use an HB pencil for any diagrams or graphs.
- Write your name, centre number and candidate number in the boxes at the top of the page.
- Write your answer to each question in the space provided.
- Do **not** use an erasable pen or correction fluid.
- Do **not** write on any bar codes.
- If additional space is needed, you should use the lined page at the end of this booklet; the question number or numbers must be clearly shown.
- You should use a calculator where appropriate.
- You must show all necessary working clearly; no marks will be given for unsupported answers from a calculator.
- Give non-exact numerical answers correct to 3 significant figures, or 1 decimal place for angles in degrees, unless a different level of accuracy is specified in the question.

INFORMATION

- The total mark for this paper is 75.
- The number of marks for each question or part question is shown in brackets [].

This document has **20** pages. Any blank pages are indicated.

2



The diagram shows part of the curve with equation $y = p \sin(q\theta) + r$, where p , q and r are constants.

(a) State the value of p . [1]

.....

.....

.....

.....

(b) State the value of q . [1]

.....

.....

.....

.....

.....

(c) State the value of r . [1]

.....

.....

.....

.....

- 4 (a) The curve with equation $y = x^2 + 2x - 5$ is translated by $\begin{pmatrix} -1 \\ 3 \end{pmatrix}$.

Find the equation of the translated curve, giving your answer in the form $y = ax^2 + bx + c$. [3]

.....

.....

.....

.....

.....

.....

.....

.....

.....

.....

.....

.....

.....

.....

.....

.....

.....

.....

.....

.....

.....

.....

- (b) The curve with equation $y = x^2 + 2x - 5$ is transformed to a curve with equation $y = 4x^2 + 4x - 5$. Describe fully the single transformation that has been applied. [2]

.....

.....

.....

.....

.....

.....

.....

.....

.....

.....

.....

.....

.....

.....

.....

.....

.....

.....

.....

.....

.....

.....

6 The function f is defined by $f(x) = 2x^2 - 16x + 23$ for $x < 3$.

(a) Express $f(x)$ in the form $2(x + a)^2 + b$. [2]

.....

.....

.....

.....

.....

.....

.....

.....

.....

.....

.....

.....

.....

.....

.....

.....

.....

.....

.....

.....

.....

.....

.....

(b) Find the range of f . [1]

.....

.....

.....

.....

.....

.....

.....

.....

.....

.....

.....

.....

.....

.....

.....

.....

.....

.....

.....

.....

.....

.....

(c) Find an expression for $f^{-1}(x)$. [3]

.....

.....

.....

.....

.....

.....

.....

.....

.....

.....

.....

.....

.....

.....

.....

.....

.....

.....

.....

.....

.....

.....

The function g is defined by $g(x) = 2x + 4$ for $x < -1$.

(d) Find and simplify an expression for $fg(x)$. [2]

.....

.....

.....

.....

.....

.....

.....

.....

.....

.....

.....

.....

.....

.....

.....

.....

.....

.....

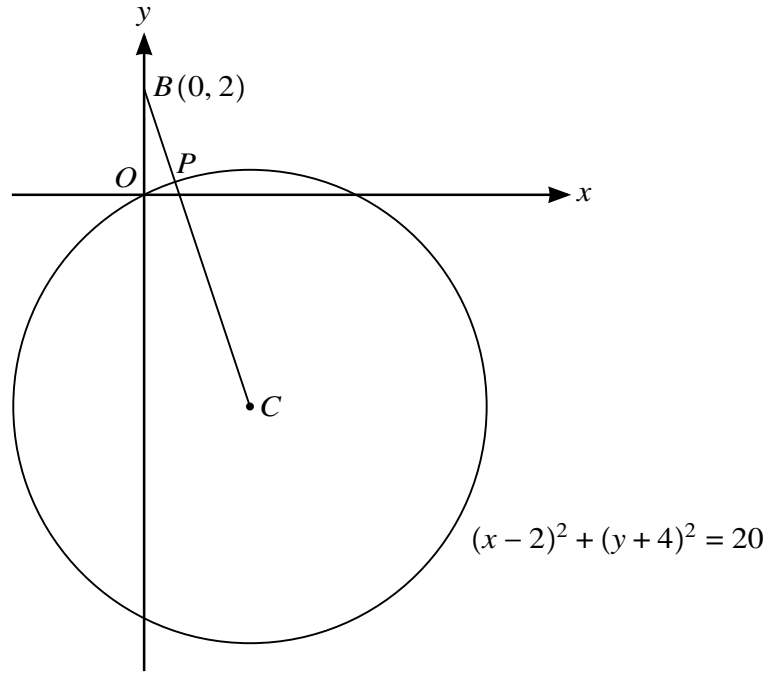
.....

.....

.....

.....

7



The diagram shows the circle with equation $(x - 2)^2 + (y + 4)^2 = 20$ and with centre C . The point B has coordinates $(0, 2)$ and the line segment BC intersects the circle at P .

(a) Find the equation of BC . [2]

.....

.....

.....

.....

.....

.....

.....

.....

.....

.....

.....

.....

.....

.....

.....

.....

.....

.....

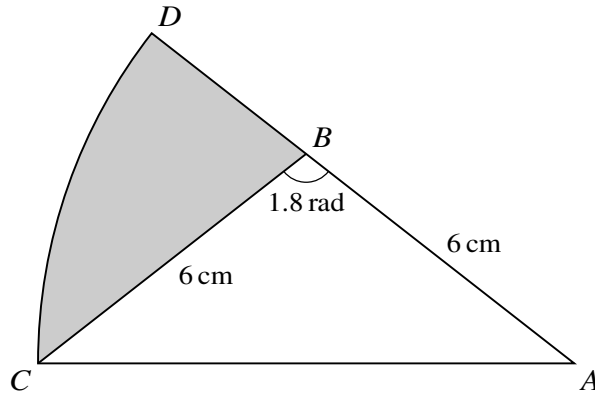
.....

.....

.....

.....

9



The diagram shows triangle ABC with $AB = BC = 6$ cm and angle $ABC = 1.8$ radians. The arc CD is part of a circle with centre A and ABD is a straight line.

(a) Find the perimeter of the shaded region. [5]

.....

.....

.....

.....

.....

.....

.....

.....

.....

.....

.....

.....

.....

.....

.....

.....

.....

.....

.....

.....

.....

.....

.....

